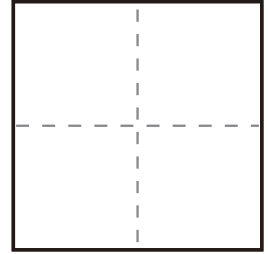
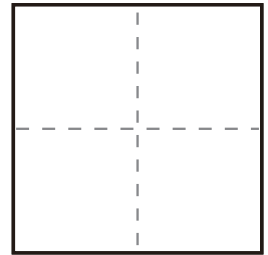


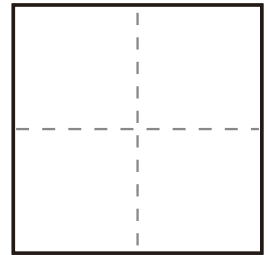
$$\textcircled{1} \quad 7 + 3 =$$



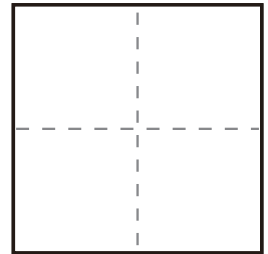
$$\textcircled{2} \quad 10 + 0 =$$



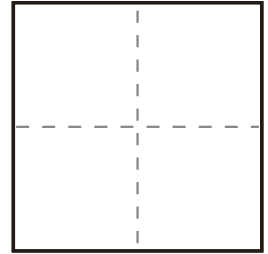
$$\textcircled{3} \quad 8 + 2 =$$



$$\textcircled{4} \quad 0 + 10 =$$



$$\textcircled{5} \quad 2 + 8 =$$



$$\textcircled{6} \quad 4 + 6 =$$

