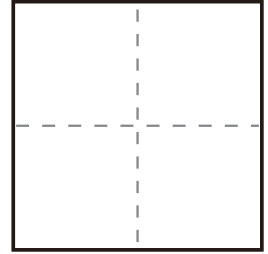
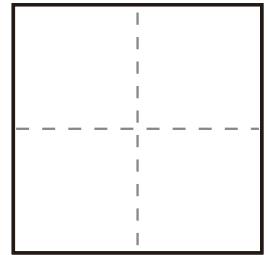


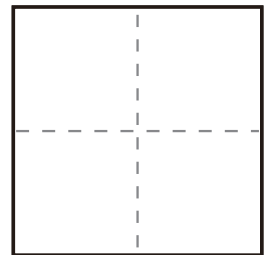
$$\textcircled{1} \quad 1 + 9 =$$



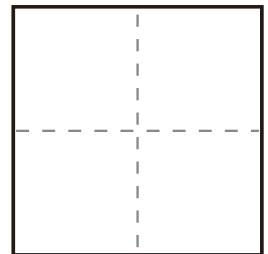
$$\textcircled{2} \quad 6 + 4 =$$



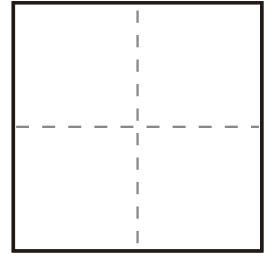
$$\textcircled{3} \quad 9 + 1 =$$



$$\textcircled{4} \quad 5 + 5 =$$



$$\textcircled{5} \quad 3 + 7 =$$



$$\textcircled{6} \quad 8 + 4 =$$

