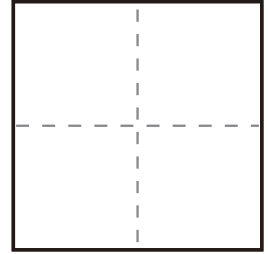
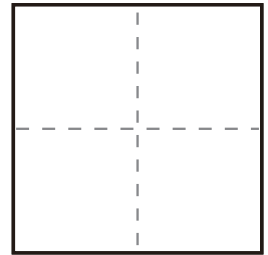


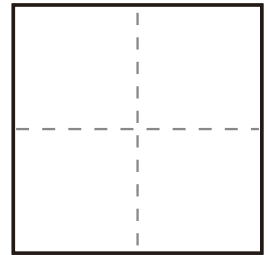
$$\textcircled{1} \quad 0 + 10 =$$



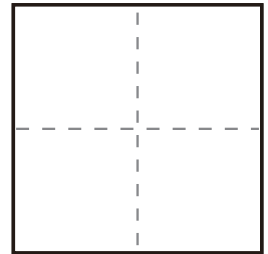
$$\textcircled{2} \quad 7 + 3 =$$



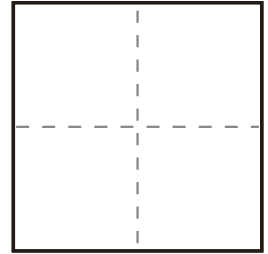
$$\textcircled{3} \quad 5 + 5 =$$



$$\textcircled{4} \quad 1 + 9 =$$



$$\textcircled{5} \quad 10 + 0 =$$



$$\textcircled{6} \quad 3 + 7 =$$

