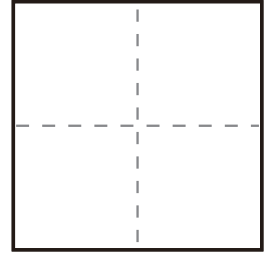
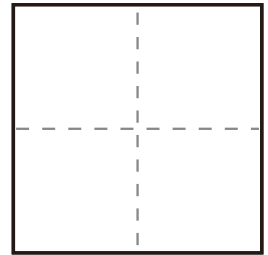


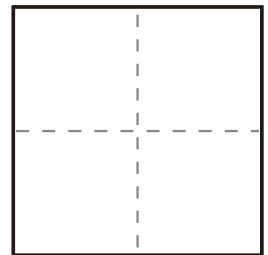
$$\textcircled{1} \quad 8 + 2 =$$



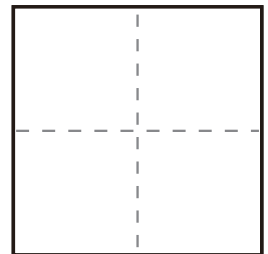
$$\textcircled{2} \quad 2 + 8 =$$



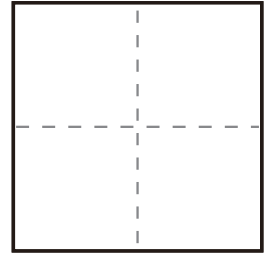
$$\textcircled{3} \quad 6 + 4 =$$



$$\textcircled{4} \quad 9 + 1 =$$



$$\textcircled{5} \quad 4 + 6 =$$



$$\textcircled{6} \quad 8 + 6 =$$

