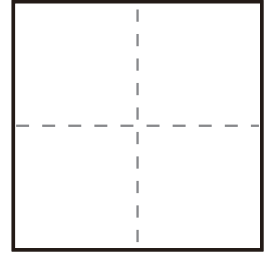
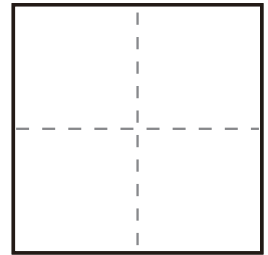


た
足し算く
繰り上がりのあるた
足し算②

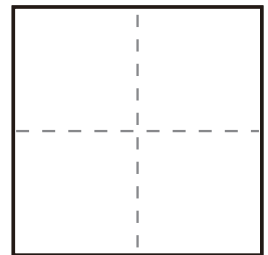
$$\textcircled{1} \quad 7 + 5 =$$



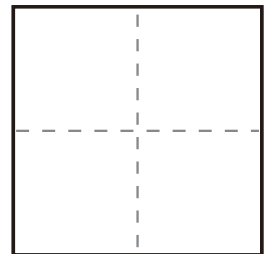
$$\textcircled{2} \quad 4 + 8 =$$



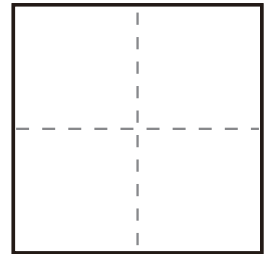
$$\textcircled{3} \quad 6 + 7 =$$



$$\textcircled{4} \quad 9 + 5 =$$



$$\textcircled{5} \quad 3 + 8 =$$



$$\textcircled{6} \quad 5 + 7 =$$

