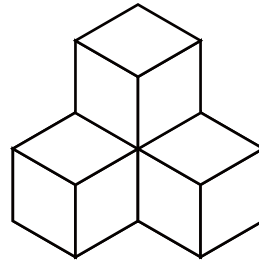
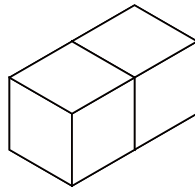
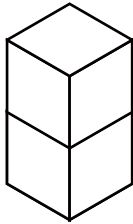


つ き あ かぞ もんだい
積み木を合わせて数える問題 ② (答え)

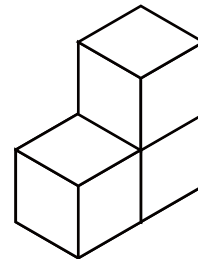
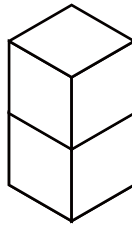
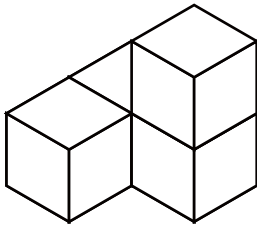
つ き あ かぞ もんだい
積み木を合わせて数えるといくつになるか () に答えましょう。

1



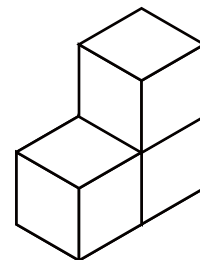
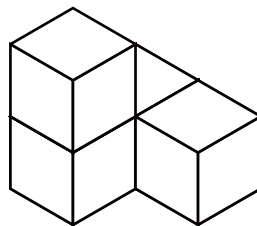
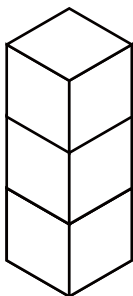
(8)

2



(9)

3

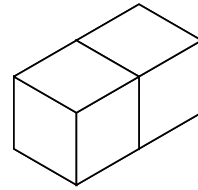
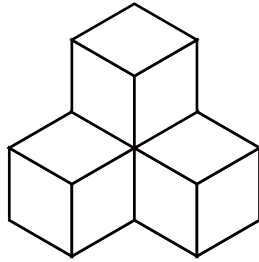
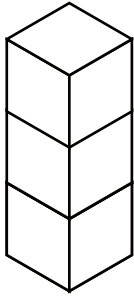


(10)

積み木を合わせて数える問題 ② (答え)

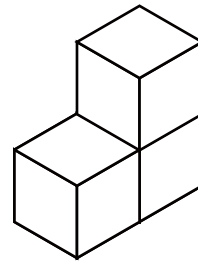
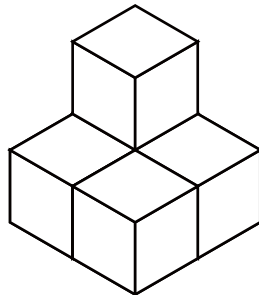
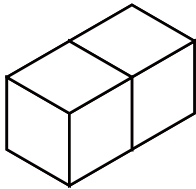
積み木を合わせて数えるといくつになるか () に答えましょう。

1



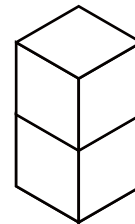
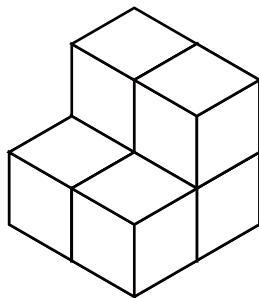
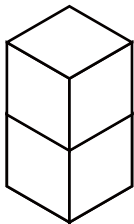
(9)

2



(10)

3



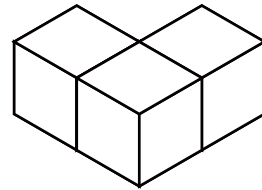
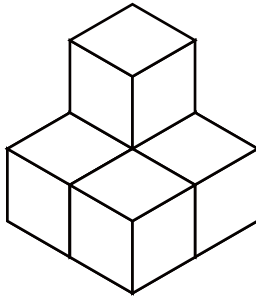
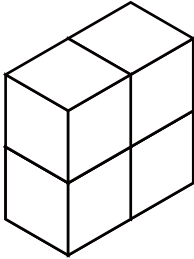
(10)

つ き あ かぞ もんだい
積み木を合わせて数える問題 ②

こた
(答え)

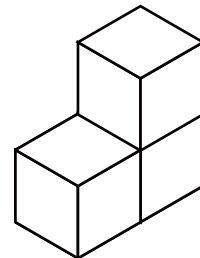
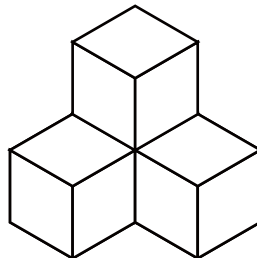
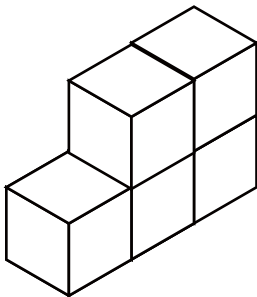
つ き あ かぞ こた
積み木を合わせて数えるといくつになるか () に答えましょう。

1



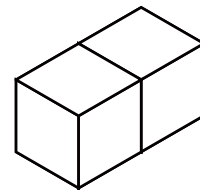
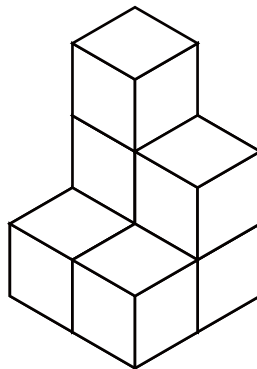
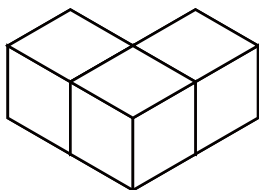
(12)

2



(12)

3

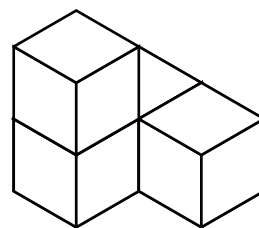
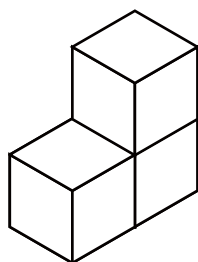
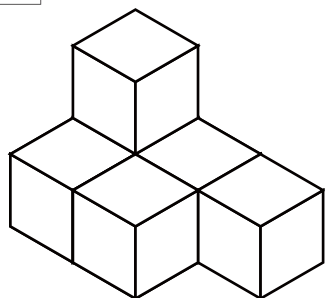


(12)

つ き あ かぞ もんだい
積み木を合わせて数える問題 ② (答え)

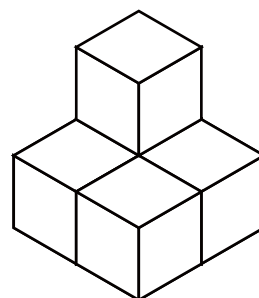
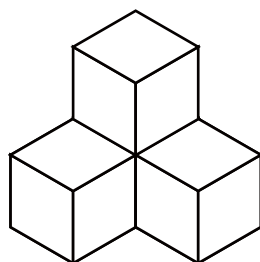
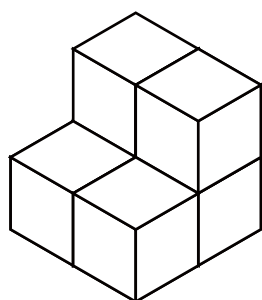
つ き あ かぞ もんだい
積み木を合わせて数えるといくつになるか () に答えましょう。

1



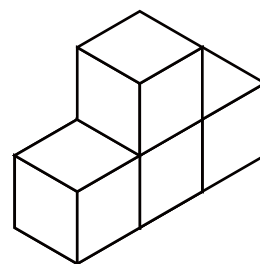
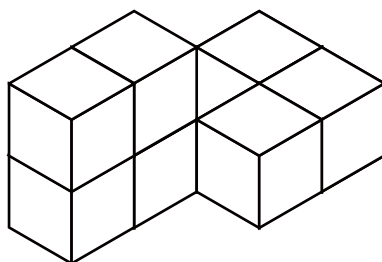
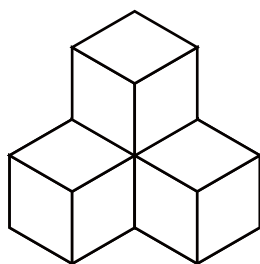
(13)

2



(15)

3



(17)