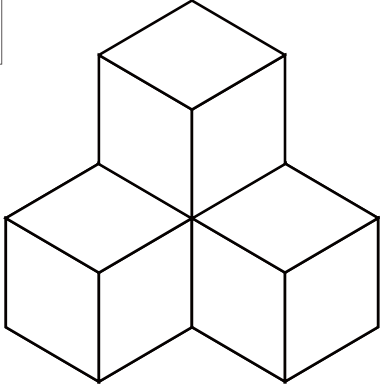
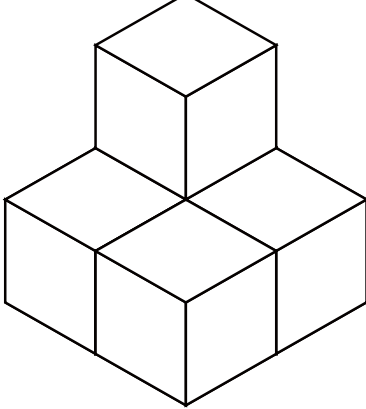
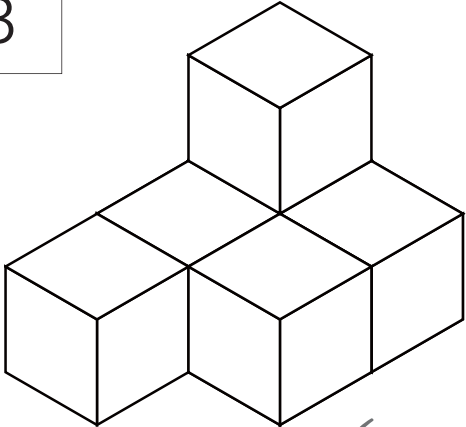
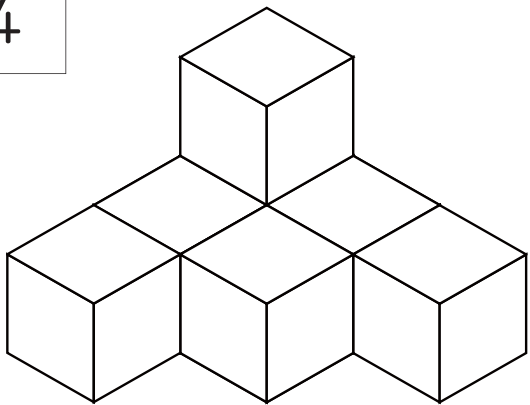
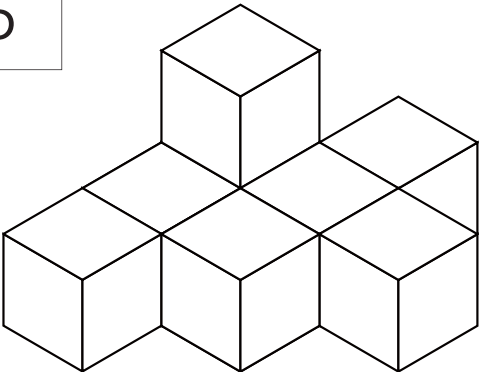
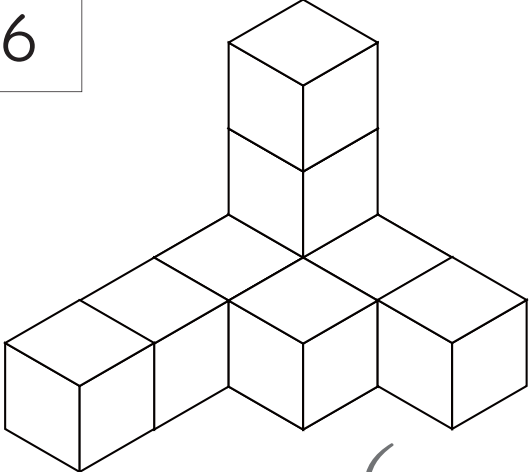


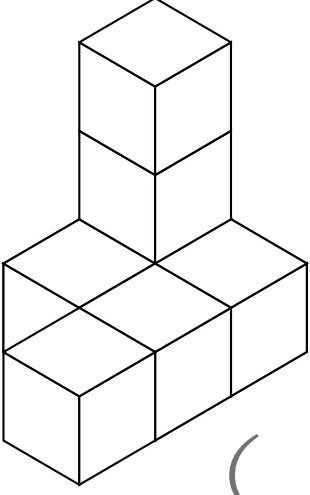
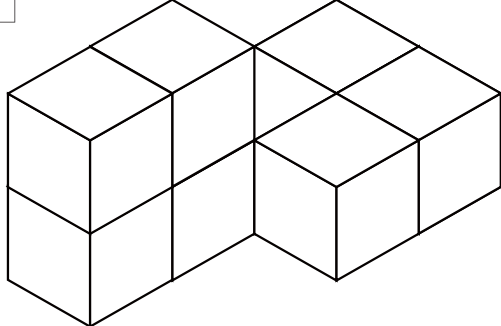
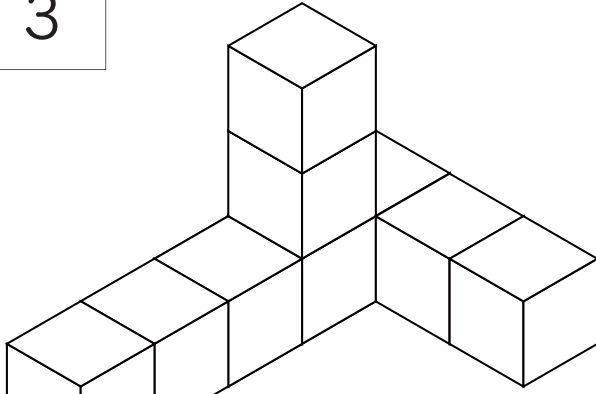

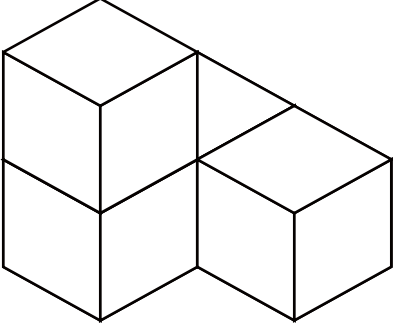
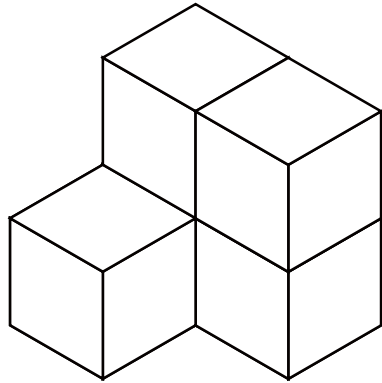
# 積み木を数える問題②

積み木（同じ大きさのブロック）を数えて（ ）に数を書きましょう。

<p>1</p>  <p>( )</p>	<p>2</p>  <p>( )</p>
<p>3</p>  <p>( )</p>	<p>4</p>  <p>( )</p>
<p>5</p>  <p>( )</p>	<p>6</p>  <p>( )</p>

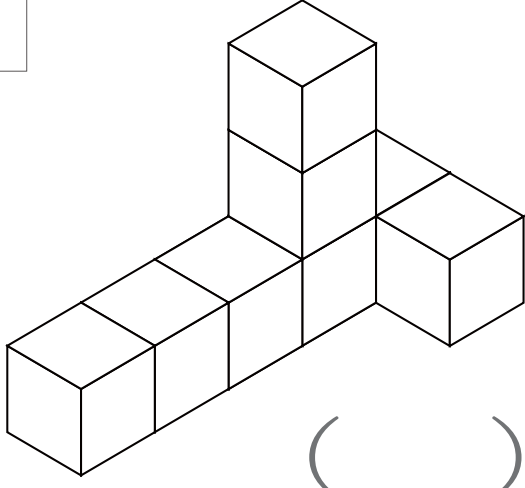
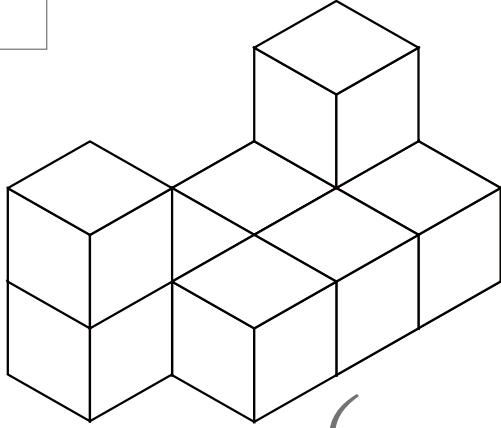
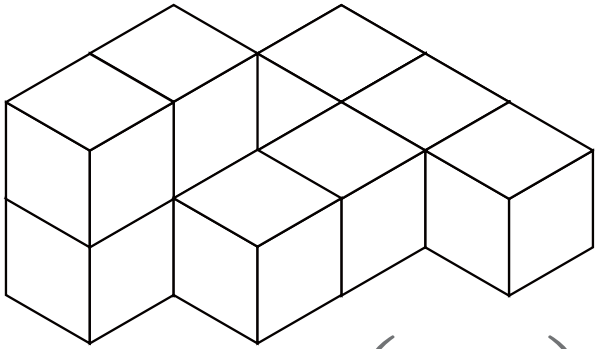
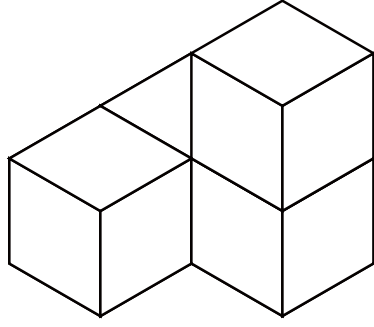
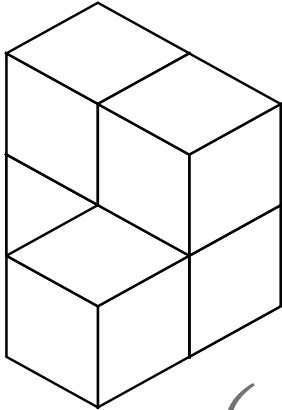
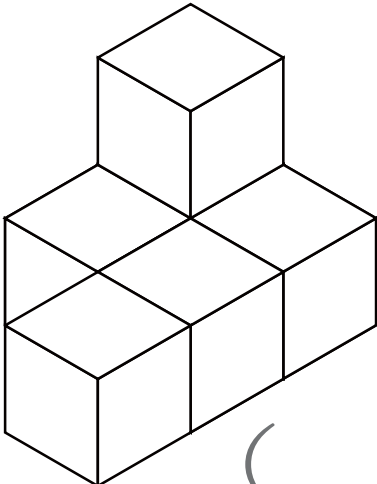
つ き かぞ もんだい  
積み木を数える問題②

つ き おな おお かぞ かず か  
積み木（同じ大きさのブロック）を数えて（ ）に数を書きましょう。

<p>1</p>  <p>( )</p>	<p>2</p>  <p>( )</p>
<p>3</p>  <p>( )</p>	<p>4</p>  <p>( )</p>
<p>5</p>  <p>( )</p>	<p>6</p>  <p>( )</p>

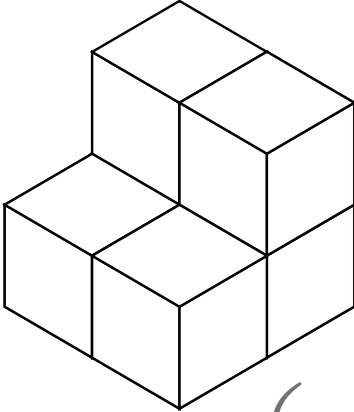
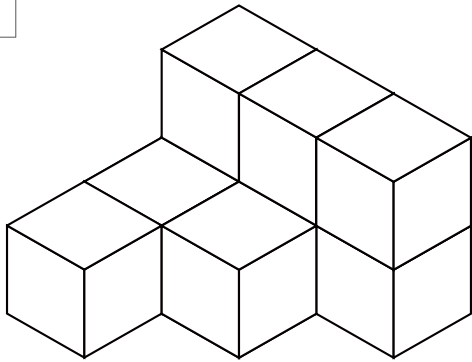

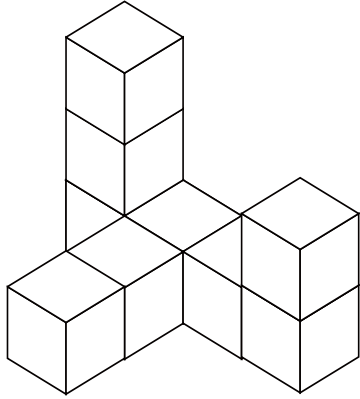
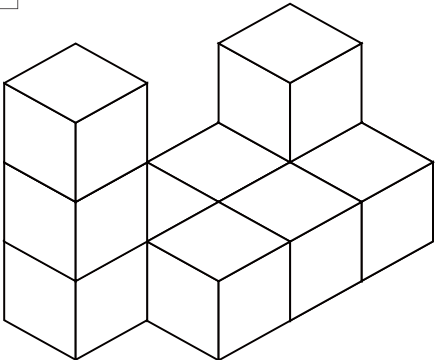

# 積み木を数える問題②

積み木（同じ大きさのブロック）を数えて（ ）に数を書きましょう。

<p>1</p>  <p>( )</p>	<p>2</p>  <p>( )</p>
<p>3</p>  <p>( )</p>	<p>4</p>  <p>( )</p>
<p>5</p>  <p>( )</p>	<p>6</p>  <p>( )</p>

つ き かぞ もんだい  
積み木を数える問題②

つ き おな おお かぞ か  
積み木（同じ大きさのブロック）を数えて（ ）に数を書きましょう。

<p>1</p>  <p>( )</p>	<p>2</p>  <p>( )</p>
<p>3</p>  <p>( )</p>	<p>4</p>  <p>( )</p>
<p>5</p>  <p>( )</p>	<p>6</p>  <p>( )</p>