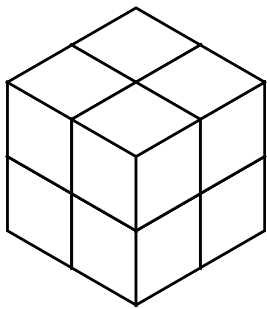


いくつ積み木を減らすか考える問題 B (答え)

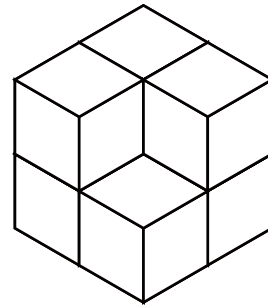
左の積み木からいくつ積み木を減らすと

右の積み木の形になりますか？ 減らす数を () に答えましょう。

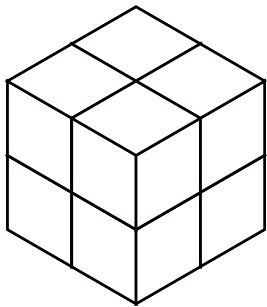
1



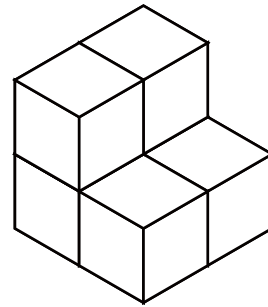

(1) 減らす



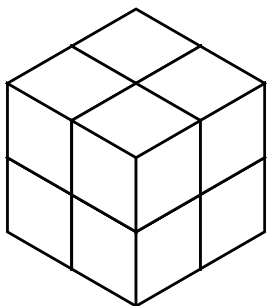
2



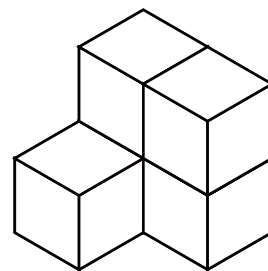

(2) 減らす



3



(3) 減らす

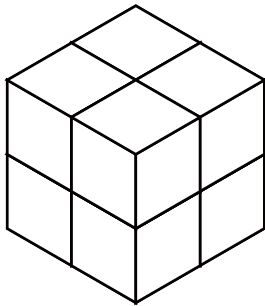


いくつ積み木を減らすか考える問題 B (答え)

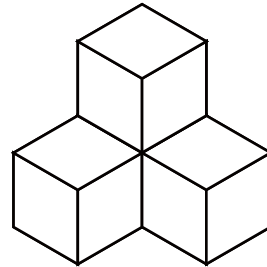
左の積み木からいくつ積み木を減らすと

右の積み木の形になりますか？ 減らす数を () に答えましょう。

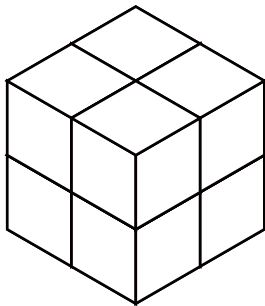
1



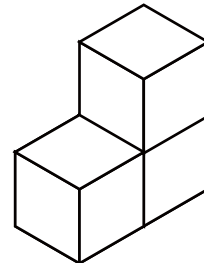
(4) 減らす



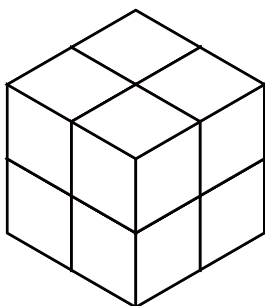
2



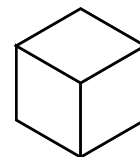

(5) 減らす



3



(7) 減らす

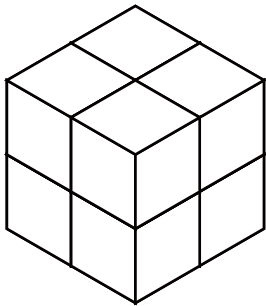


いくつ積み木を減らすか考える問題 B (答え)

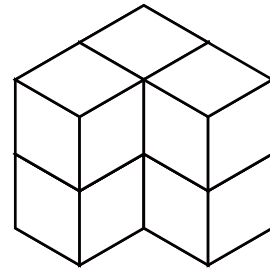
左の積み木からいくつ積み木を減らすと

右の積み木の形になりますか？ 減らす数を () に答えましょう。

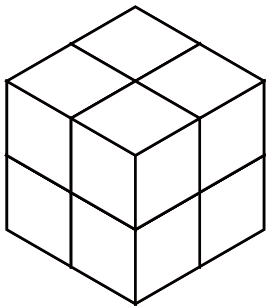
1



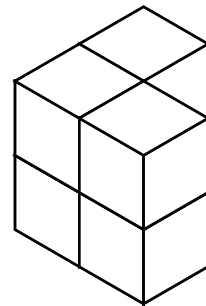
(2) 減らす



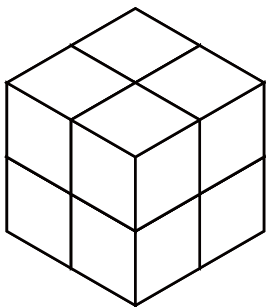
2



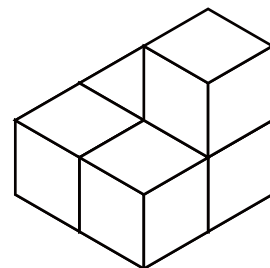
(2) 減らす



3



(3) 減らす

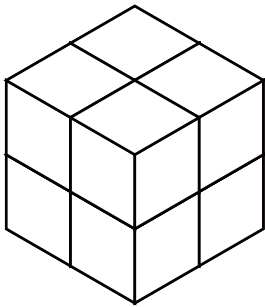


いくつ積み木を減らすか考える問題 B (答え)

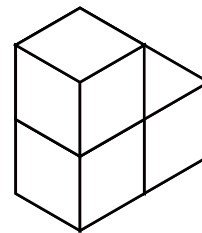
左の積み木からいくつ積み木を減らすと

右の積み木の形になりますか？ 減らす数を () に答えましょう。

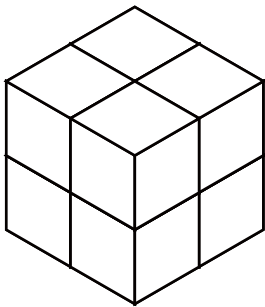
1



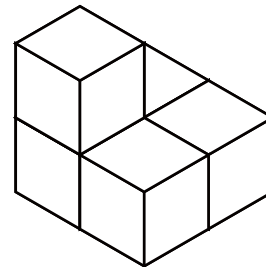
(5) 減らす



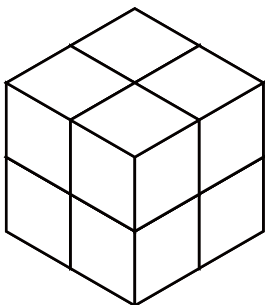
2



(3) 減らす



3



(4) 減らす

