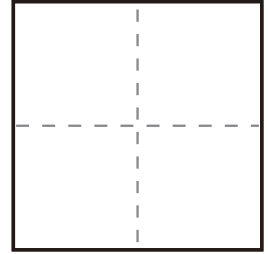
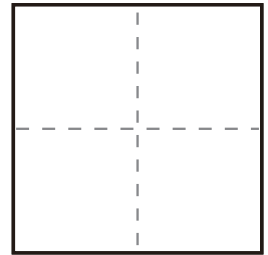


ひ  
引き算5までのひ  
引き算

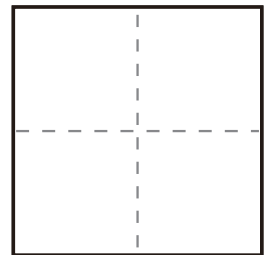
$$\textcircled{1} \quad 5 - 2 =$$



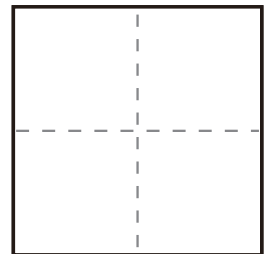
$$\textcircled{2} \quad 5 - 4 =$$



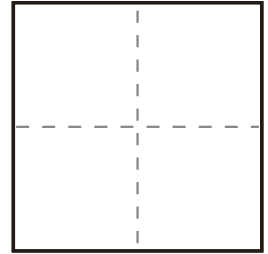
$$\textcircled{3} \quad 2 - 1 =$$



$$\textcircled{4} \quad 4 - 2 =$$



$$\textcircled{5} \quad 4 - 1 =$$



$$\textcircled{6} \quad 5 - 3 =$$

