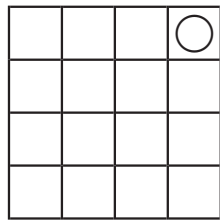
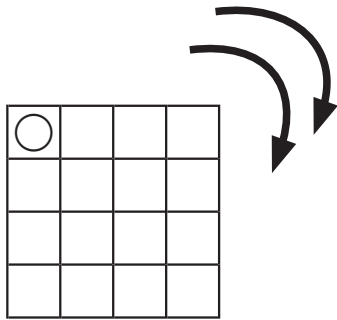
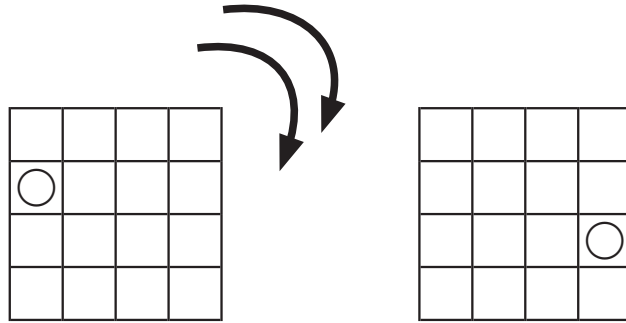


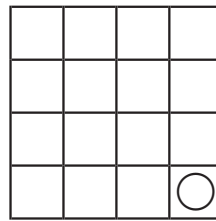
図形の回転問題 2A (16 ます) (答え)

お手本と同じように図を矢印の方向に回転させます。

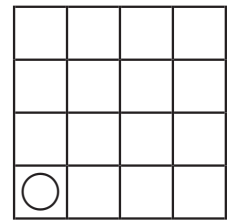
それぞれどのようになりますか？ 正しいものに○をつけましょう。



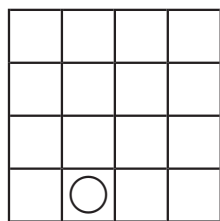
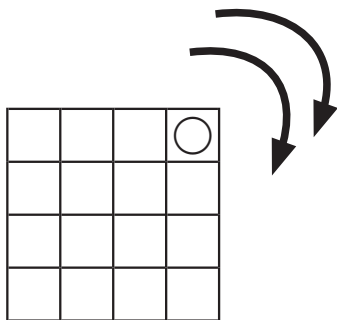
()



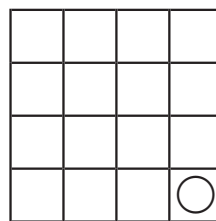
(○)



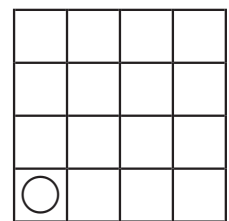
()



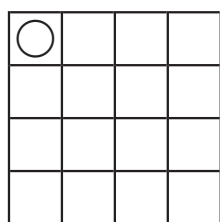
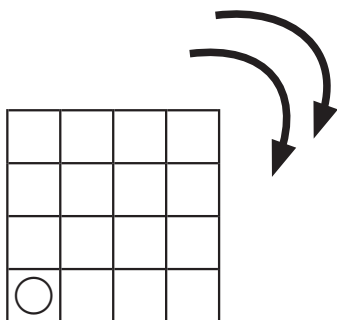
()



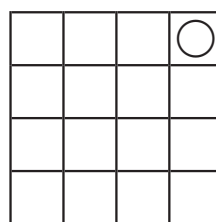
()



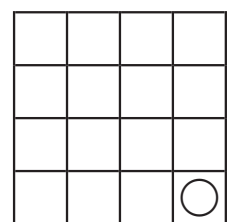
(○)



()



(○)

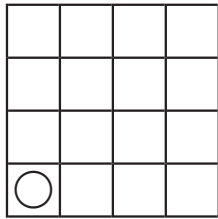
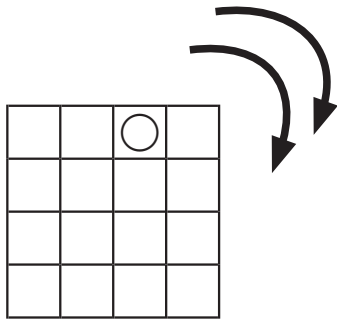
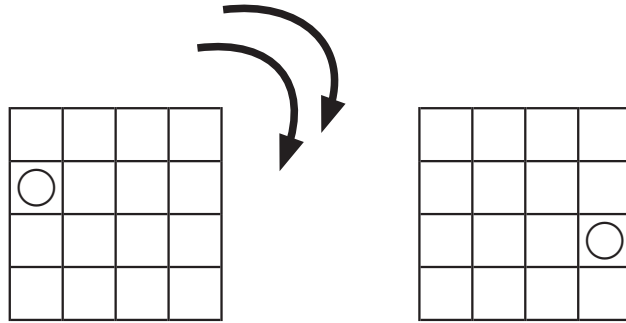


()

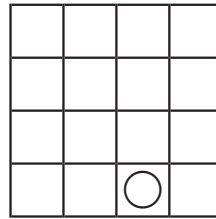
図形の回転問題 2A (16 ます) (答え)

お手本と同じように図を矢印の方向に回転させます。

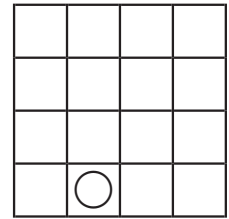
それぞれどのようになりますか？ 正しいものに○をつけましょう。



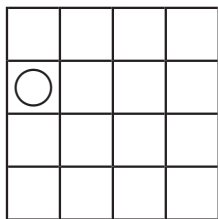
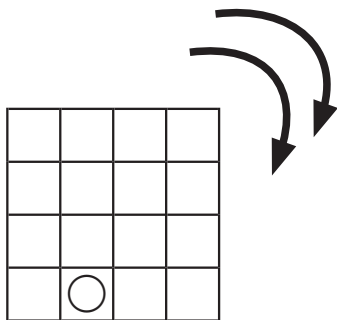
()



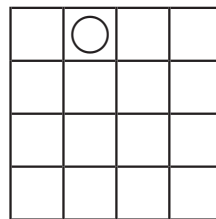
()



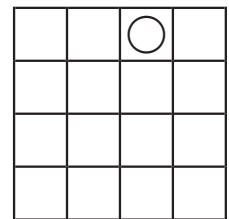
(○)



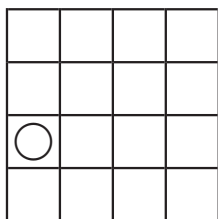
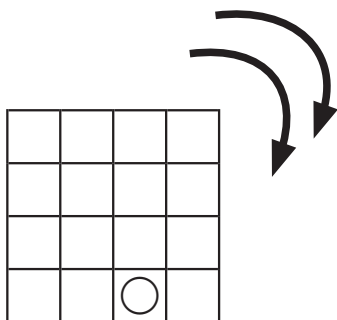
()



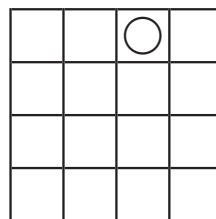
()



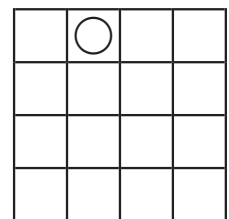
(○)



()



()



(○)

ずけい かいてんもんだい
 図形の回転問題 2A (16 ます) (答え)

てほん おな ず やじるし ほうこう かいてん
 お手本と同じように図を矢印の方向に回転させます。

それぞれどのようになりますか？ 正しいものに○をつけましょう。

